

Zahlenraum 10 000 (Tausender)

Setze die Reihe fort!

1 000	2 000			

Nachbarn!

	3 000	
	8 000	
	5 000	
	2 000	
	9 000	

	4 000	
	6 000	
	7 000	
	1 000	
	5 000	

Setze das richtige Zeichen < oder > ein!

$2\,000 \quad \bigcirc \quad 6\,000$

$1\,000 \quad \bigcirc \quad 4\,000$

$9\,000 \quad \bigcirc \quad 7\,000$

$9\,000 \quad \bigcirc \quad 10\,000$

$5\,000 \quad \bigcirc \quad 6\,000$

$4\,000 \quad \bigcirc \quad 2\,000$

$7\,000 \quad \bigcirc \quad 10\,000$

$6\,000 \quad \bigcirc \quad 7\,000$

Kannst du das schon?

$2\,000 + 3\,000 =$

$8\,000 - 6\,000 =$

$1\,000 + 8\,000 =$

$9\,000 - 5\,000 =$

$6\,000 + 2\,000 =$

$2\,000 - 2\,000 =$

$4\,000 + 4\,000 =$

$6\,000 - 3\,000 =$

$8\,000 + 2\,000 =$

$7\,000 - 2\,000 =$

$5\,000 + 3\,000 =$

$10\,000 - 7\,000 =$

Zahlenraum 10 000 (Tausender, Hunderter)Setze die Reihe fort!

7 600	7 700			

Nachbarn!

	2 500	
	1 900	
	8 100	
	5 500	
	3 900	

	6 000	
	4 200	
	7 900	
	9 300	
	8 600	

Setze das richtige Zeichen < oder > ein!

3 200 ○ 4 200

8 900 ○ 9 800

9 100 ○ 9 000

1 500 ○ 2 200

5 400 ○ 4 500

8 900 ○ 7 900

6 500 ○ 5 900

5 800 ○ 8 500

Kannst du das schon?

1 200 + 300 =

7 600 - 300 =

5 500 + 400 =

3 900 - 800 =

9 100 + 600 =

2 500 - 500 =

6 400 + 400 =

4 700 - 400 =

3 400 + 600 =

9 500 - 500 =

7 300 + 100 =

1 400 - 200 =

Zahlenraum 10 000 (Tausender, Hunderter, Zehner)

Setze die Reihe fort!



4 550	4560			

Nachbarn!

	2 380	
	6 790	
	3 400	
	5 610	
	4 880	

	4 320	
	3 390	
	7 810	
	8 170	
	2 930	

Setze das richtige Zeichen < oder > ein!

- | | | | | | |
|-------|-----------------------|-------|-------|-----------------------|-------|
| 5 690 | <input type="radio"/> | 5 680 | 3 950 | <input type="radio"/> | 4 000 |
| 1 930 | <input type="radio"/> | 1 820 | 9 210 | <input type="radio"/> | 9 110 |
| 7 810 | <input type="radio"/> | 7 820 | 8 280 | <input type="radio"/> | 8 290 |
| 3 950 | <input type="radio"/> | 3 940 | 2 540 | <input type="radio"/> | 2 530 |

Kannst du das schon?

- | | |
|--------------|--------------|
| 1 220 + 50 = | 6 730 - 30 = |
| 4 560 + 40 = | 2 970 - 50 = |
| 2 310 + 50 = | 4 260 - 50 = |
| 7 240 + 40 = | 1 980 - 30 = |
| 8 110 + 90 = | 3 450 - 50 = |
| 3 760 + 10 = | 5 270 - 40 = |



Zahlenraum 10 000 (Tausender, Hunderter, Zehner, Einer)

Setze die Reihe fort!

6 788				

Nachbarn!

	3 412	
	9 369	
	4 581	
	3 599	
	1 240	

	3 458	
	8 343	
	2 699	
	4 999	
	3 441	

Setze das richtige Zeichen < oder > ein!

$1\ 289 \quad \bigcirc \quad 1\ 298$

$4\ 665 \quad \bigcirc \quad 4\ 675$

$5\ 675 \quad \bigcirc \quad 5\ 657$

$2\ 954 \quad \bigcirc \quad 2\ 945$

$3\ 912 \quad \bigcirc \quad 3\ 921$

$8\ 136 \quad \bigcirc \quad 8\ 135$

$7\ 578 \quad \bigcirc \quad 5\ 787$

$4\ 299 \quad \bigcirc \quad 4\ 288$

Kannst du das schon?

$3\ 478 + 9 =$

$7\ 566 - 8 =$

$1\ 375 + 7 =$

$1\ 834 - 7 =$

$2\ 526 + 5 =$

$8\ 542 - 5 =$

$9\ 134 + 8 =$


$4\ 291 - 8 =$

$4\ 556 + 6 =$

$6\ 911 - 7 =$

$8\ 477 + 9 =$

$3\ 565 - 9 =$



Zahlenraum 10 000

Schreibe die richtige Zahl dazu!

Male an: Tausender = blau, Hunderter = grün, Zehner = rot, Einer = gelb

Tausender	Hunderter	Zehner	Einer	Zahl
<div style="display: flex; justify-content: space-around;"> <div style="border: 1px solid black; width: 40px; height: 25px; margin: 5px;"></div> <div style="border: 1px solid black; width: 40px; height: 25px; margin: 5px;"></div> <div style="border: 1px solid black; width: 40px; height: 25px; margin: 5px;"></div> <div style="border: 1px solid black; width: 40px; height: 25px; margin: 5px;"></div> <div style="border: 1px solid black; width: 40px; height: 25px; margin: 5px;"></div> </div> <div style="display: flex; justify-content: space-around; margin-top: 10px;"> <div style="border: 1px solid black; width: 40px; height: 25px;"></div> <div style="border: 1px solid black; width: 40px; height: 25px;"></div> <div style="border: 1px solid black; width: 40px; height: 25px;"></div> <div style="border: 1px solid black; width: 40px; height: 25px;"></div> </div>	<div style="display: flex; justify-content: space-around;"> <div style="border: 1px solid black; width: 30px; height: 25px; margin: 5px;"></div> <div style="border: 1px solid black; width: 30px; height: 25px; margin: 5px;"></div> <div style="border: 1px solid black; width: 30px; height: 25px; margin: 5px;"></div> <div style="border: 1px solid black; width: 30px; height: 25px; margin: 5px;"></div> </div> <div style="display: flex; justify-content: space-around; margin-top: 10px;"> <div style="border: 1px solid black; width: 30px; height: 25px;"></div> <div style="border: 1px solid black; width: 30px; height: 25px;"></div> </div>	<div style="display: flex; justify-content: space-around;"> <div style="border: 1px solid black; width: 20px; height: 25px; margin: 5px;"></div> <div style="border: 1px solid black; width: 20px; height: 25px; margin: 5px;"></div> </div> <div style="display: flex; justify-content: space-around; margin-top: 10px;"> <div style="border: 1px solid black; width: 20px; height: 25px;"></div> <div style="border: 1px solid black; width: 20px; height: 25px;"></div> </div>	<div style="display: flex; justify-content: space-around;"> <div style="border: 1px solid black; width: 15px; height: 15px; margin: 5px;"></div> <div style="border: 1px solid black; width: 15px; height: 15px; margin: 5px;"></div> <div style="border: 1px solid black; width: 15px; height: 15px; margin: 5px;"></div> </div> <div style="display: flex; justify-content: space-around; margin-top: 5px;"> <div style="border: 1px solid black; width: 15px; height: 15px; margin: 5px;"></div> <div style="border: 1px solid black; width: 15px; height: 15px; margin: 5px;"></div> <div style="border: 1px solid black; width: 15px; height: 15px; margin: 5px;"></div> </div> <div style="display: flex; justify-content: space-around; margin-top: 5px;"> <div style="border: 1px solid black; width: 15px; height: 15px; margin: 5px;"></div> <div style="border: 1px solid black; width: 15px; height: 15px; margin: 5px;"></div> </div>	
<div style="display: flex; justify-content: space-around;"> <div style="border: 1px solid black; width: 40px; height: 25px; margin: 5px;"></div> <div style="border: 1px solid black; width: 40px; height: 25px; margin: 5px;"></div> <div style="border: 1px solid black; width: 40px; height: 25px; margin: 5px;"></div> <div style="border: 1px solid black; width: 40px; height: 25px; margin: 5px;"></div> <div style="border: 1px solid black; width: 40px; height: 25px; margin: 5px;"></div> </div>	<div style="display: flex; justify-content: space-around;"> <div style="border: 1px solid black; width: 30px; height: 25px; margin: 5px;"></div> <div style="border: 1px solid black; width: 30px; height: 25px; margin: 5px;"></div> <div style="border: 1px solid black; width: 30px; height: 25px; margin: 5px;"></div> </div>	<div style="display: flex; justify-content: space-around;"> <div style="border: 1px solid black; width: 20px; height: 25px; margin: 5px;"></div> <div style="border: 1px solid black; width: 20px; height: 25px; margin: 5px;"></div> <div style="border: 1px solid black; width: 20px; height: 25px; margin: 5px;"></div> </div> <div style="display: flex; justify-content: space-around; margin-top: 10px;"> <div style="border: 1px solid black; width: 20px; height: 25px;"></div> <div style="border: 1px solid black; width: 20px; height: 25px;"></div> </div>	<div style="display: flex; justify-content: space-around;"> <div style="border: 1px solid black; width: 15px; height: 15px; margin: 5px;"></div> <div style="border: 1px solid black; width: 15px; height: 15px; margin: 5px;"></div> <div style="border: 1px solid black; width: 15px; height: 15px; margin: 5px;"></div> </div> <div style="display: flex; justify-content: space-around; margin-top: 5px;"> <div style="border: 1px solid black; width: 15px; height: 15px; margin: 5px;"></div> <div style="border: 1px solid black; width: 15px; height: 15px; margin: 5px;"></div> </div>	
<div style="display: flex; justify-content: space-around;"> <div style="border: 1px solid black; width: 40px; height: 25px; margin: 5px;"></div> <div style="border: 1px solid black; width: 40px; height: 25px; margin: 5px;"></div> <div style="border: 1px solid black; width: 40px; height: 25px; margin: 5px;"></div> <div style="border: 1px solid black; width: 40px; height: 25px; margin: 5px;"></div> <div style="border: 1px solid black; width: 40px; height: 25px; margin: 5px;"></div> </div> <div style="display: flex; justify-content: space-around; margin-top: 10px;"> <div style="border: 1px solid black; width: 40px; height: 25px;"></div> <div style="border: 1px solid black; width: 40px; height: 25px;"></div> </div>	<div style="display: flex; justify-content: space-around;"> <div style="border: 1px solid black; width: 30px; height: 25px; margin: 5px;"></div> <div style="border: 1px solid black; width: 30px; height: 25px; margin: 5px;"></div> <div style="border: 1px solid black; width: 30px; height: 25px; margin: 5px;"></div> </div> <div style="display: flex; justify-content: space-around; margin-top: 10px;"> <div style="border: 1px solid black; width: 30px; height: 25px;"></div> <div style="border: 1px solid black; width: 30px; height: 25px;"></div> <div style="border: 1px solid black; width: 30px; height: 25px;"></div> </div>	<div style="display: flex; justify-content: space-around;"> <div style="border: 1px solid black; width: 20px; height: 25px; margin: 5px;"></div> <div style="border: 1px solid black; width: 20px; height: 25px; margin: 5px;"></div> <div style="border: 1px solid black; width: 20px; height: 25px; margin: 5px;"></div> </div> <div style="display: flex; justify-content: space-around; margin-top: 10px;"> <div style="border: 1px solid black; width: 20px; height: 25px;"></div> <div style="border: 1px solid black; width: 20px; height: 25px;"></div> <div style="border: 1px solid black; width: 20px; height: 25px;"></div> </div>	<div style="display: flex; justify-content: space-around;"> <div style="border: 1px solid black; width: 15px; height: 15px; margin: 5px;"></div> <div style="border: 1px solid black; width: 15px; height: 15px; margin: 5px;"></div> <div style="border: 1px solid black; width: 15px; height: 15px; margin: 5px;"></div> </div>	
<div style="display: flex; justify-content: space-around;"> <div style="border: 1px solid black; width: 40px; height: 25px; margin: 5px;"></div> <div style="border: 1px solid black; width: 40px; height: 25px; margin: 5px;"></div> </div> <div style="display: flex; justify-content: space-around; margin-top: 10px;"> <div style="border: 1px solid black; width: 40px; height: 25px;"></div> <div style="border: 1px solid black; width: 40px; height: 25px;"></div> </div>	<div style="display: flex; justify-content: space-around;"> <div style="border: 1px solid black; width: 30px; height: 25px; margin: 5px;"></div> <div style="border: 1px solid black; width: 30px; height: 25px; margin: 5px;"></div> </div>	<div style="display: flex; justify-content: space-around;"> <div style="border: 1px solid black; width: 20px; height: 25px; margin: 5px;"></div> <div style="border: 1px solid black; width: 20px; height: 25px; margin: 5px;"></div> </div>	<div style="display: flex; justify-content: space-around;"> <div style="border: 1px solid black; width: 15px; height: 15px; margin: 5px;"></div> <div style="border: 1px solid black; width: 15px; height: 15px; margin: 5px;"></div> <div style="border: 1px solid black; width: 15px; height: 15px; margin: 5px;"></div> </div> <div style="display: flex; justify-content: space-around; margin-top: 10px;"> <div style="border: 1px solid black; width: 15px; height: 15px; margin: 5px;"></div> </div>	



<div style="display: flex; flex-wrap: wrap; gap: 10px;"> <div style="border: 1px solid black; width: 40px; height: 20px;"></div> <div style="border: 1px solid black; width: 40px; height: 20px;"></div> <div style="border: 1px solid black; width: 40px; height: 20px;"></div> <div style="border: 1px solid black; width: 40px; height: 20px;"></div> </div>	<div style="display: flex; flex-wrap: wrap; gap: 10px;"> <div style="border: 1px solid black; width: 30px; height: 20px;"></div> <div style="border: 1px solid black; width: 30px; height: 20px;"></div> <div style="border: 1px solid black; width: 30px; height: 20px;"></div> <div style="border: 1px solid black; width: 30px; height: 20px;"></div> <div style="border: 1px solid black; width: 30px; height: 20px;"></div> <div style="border: 1px solid black; width: 30px; height: 20px;"></div> </div>	<div style="display: flex; flex-wrap: wrap; gap: 10px;"> <div style="border: 1px solid black; width: 30px; height: 20px;"></div> <div style="border: 1px solid black; width: 30px; height: 20px;"></div> <div style="border: 1px solid black; width: 30px; height: 20px;"></div> <div style="border: 1px solid black; width: 30px; height: 20px;"></div> <div style="border: 1px solid black; width: 30px; height: 20px;"></div> </div>	<div style="display: flex; justify-content: space-around; align-items: center;"> <div style="border: 1px solid black; width: 20px; height: 20px; border-radius: 50%;"></div> </div>	
<div style="display: flex; flex-wrap: wrap; gap: 10px;"> <div style="border: 1px solid black; width: 40px; height: 20px;"></div> <div style="border: 1px solid black; width: 40px; height: 20px;"></div> <div style="border: 1px solid black; width: 40px; height: 20px;"></div> </div>	<div style="display: flex; flex-wrap: wrap; gap: 10px;"> <div style="border: 1px solid black; width: 30px; height: 20px;"></div> <div style="border: 1px solid black; width: 30px; height: 20px;"></div> <div style="border: 1px solid black; width: 30px; height: 20px;"></div> <div style="border: 1px solid black; width: 30px; height: 20px;"></div> </div>	<div style="display: flex; flex-wrap: wrap; gap: 10px;"> <div style="border: 1px solid black; width: 30px; height: 20px;"></div> <div style="border: 1px solid black; width: 30px; height: 20px;"></div> <div style="border: 1px solid black; width: 30px; height: 20px;"></div> <div style="border: 1px solid black; width: 30px; height: 20px;"></div> </div>	<div style="display: flex; justify-content: space-around; align-items: center;"> <div style="border: 1px solid black; width: 20px; height: 20px; border-radius: 50%;"></div> <div style="border: 1px solid black; width: 20px; height: 20px; border-radius: 50%;"></div> </div>	
<div style="display: flex; flex-wrap: wrap; gap: 10px;"> <div style="border: 1px solid black; width: 40px; height: 20px;"></div> </div>	<div style="display: flex; flex-wrap: wrap; gap: 10px;"> <div style="border: 1px solid black; width: 30px; height: 20px;"></div> </div>	<div style="display: flex; flex-wrap: wrap; gap: 10px;"> <div style="border: 1px solid black; width: 30px; height: 20px;"></div> </div>	<div style="display: flex; justify-content: space-around; align-items: center;"> <div style="border: 1px solid black; width: 20px; height: 20px; border-radius: 50%;"></div> <div style="border: 1px solid black; width: 20px; height: 20px; border-radius: 50%;"></div> </div>	
<div style="display: flex; flex-wrap: wrap; gap: 10px;"> <div style="border: 1px solid black; width: 40px; height: 20px;"></div> <div style="border: 1px solid black; width: 40px; height: 20px;"></div> <div style="border: 1px solid black; width: 40px; height: 20px;"></div> <div style="border: 1px solid black; width: 40px; height: 20px;"></div> </div>	<div style="display: flex; flex-wrap: wrap; gap: 10px;"> <div style="border: 1px solid black; width: 30px; height: 20px;"></div> </div>		<div style="display: flex; justify-content: space-around; align-items: center;"> <div style="border: 1px solid black; width: 20px; height: 20px; border-radius: 50%;"></div> <div style="border: 1px solid black; width: 20px; height: 20px; border-radius: 50%;"></div> <div style="border: 1px solid black; width: 20px; height: 20px; border-radius: 50%;"></div> </div>	
<div style="display: flex; flex-wrap: wrap; gap: 10px;"> <div style="border: 1px solid black; width: 40px; height: 20px;"></div> <div style="border: 1px solid black; width: 40px; height: 20px;"></div> </div>	<div style="display: flex; flex-wrap: wrap; gap: 10px;"> <div style="border: 1px solid black; width: 30px; height: 20px;"></div> <div style="border: 1px solid black; width: 30px; height: 20px;"></div> <div style="border: 1px solid black; width: 30px; height: 20px;"></div> </div>	<div style="display: flex; flex-wrap: wrap; gap: 10px;"> <div style="border: 1px solid black; width: 30px; height: 20px;"></div> </div>		



Zahlenraum 10 000

Ergänzen:

$2\ 000 + \underline{\quad} = 10\ 000$

$4\ 000 + \underline{\quad} = 10\ 000$

$5\ 000 + \underline{\quad} = 10\ 000$

$6\ 000 + \underline{\quad} = 10\ 000$

$1\ 000 + \underline{\quad} = 10\ 000$

$3\ 000 + \underline{\quad} = 10\ 000$

$7\ 000 + \underline{\quad} = 10\ 000$

$8\ 000 + \underline{\quad} = 10\ 000$

Setze zusammen:

$4T\ 7H\ 1Z\ 9E = \underline{\quad}$

$7H\ 2T\ 9E\ 2Z = \underline{\quad}$

$1T\ 4H\ 8Z\ 2E = \underline{\quad}$

$6E\ 5T\ 3Z\ 7H = \underline{\quad}$

$7T\ 8H\ 4Z\ 5E = \underline{\quad}$

$4Z\ 1H\ 1T\ 9E = \underline{\quad}$

$3T\ 9H\ 1Z\ 2E = \underline{\quad}$

$5T\ 7E\ 2Z\ 3H = \underline{\quad}$

$9T\ 9H\ 3Z\ 7E = \underline{\quad}$

$2Z\ 4H\ 8E\ 8T = \underline{\quad}$

Zerlege die Zahlen:

$5463 = 5T\ 4H\ 6Z\ 3E$

$3892 = \underline{\quad}$

$7584 = \underline{\quad}$

$2004 = \underline{\quad}$

$4702 = \underline{\quad}$

$9213 = \underline{\quad}$

$1923 = \underline{\quad}$

$1020 = \underline{\quad}$

$5656 = \underline{\quad}$

$3045 = \underline{\quad}$

Schreibe alle Möglichkeiten auf:

T	H	Z	E

T	H	Z	E

T	H	Z	E

4561

8930

2563



Zahlenraum 10 000

Sachrechnen

1.) Rudi hat auf seinem Sparbuch 2 000 Euro. Manuel hat 6 000 Euro.
Wie viele Euro haben beide insgesamt?

R:

A: _____

2.) Lilli hat 8 000 Euro. Sie kauft sich einen Fernseher um 1 000 Euro.
Wie viele Euro hat Lilli noch?

R:

A: _____

3.) Auf einem Lastwagen sind 5 000 kg Kohlen. 2 000 kg Kohlen werden
abgeladen. Wie viele kg Kohlen sind noch auf dem Lastwagen?

R:

A: _____

4.) Auf dem ersten Lastwagen sind 4 000 kg Äpfel, auf dem zweiten
Lastwagen sind 3 000 kg Birnen und auf dem dritten Lastwagen sind
1 000 kg Zwetschken. Wie viele kg Obst sind auf allen Lastwägen?

R:

A: _____



Zahlenraum 10 000

Sachrechnen

1. Eine Straße ist 4 500 m lang. Bei Bauarbeiten wird sie um 1 200 m verlängert. Wie lang ist die Straße?

R:

A: _____

2. Auf einem Ballen Stoff sind 1 280 m. 560 m Stoff werden verkauft. Wie viele m Stoff sind noch auf dem Ballen?

R:

A: _____

3. Auf einem Lastwagen sind 4 535 kg Äpfel. 1 166 kg Äpfel werden abgeladen. Wie viele kg Äpfel sind noch auf dem Lastwagen?

R:

A: _____

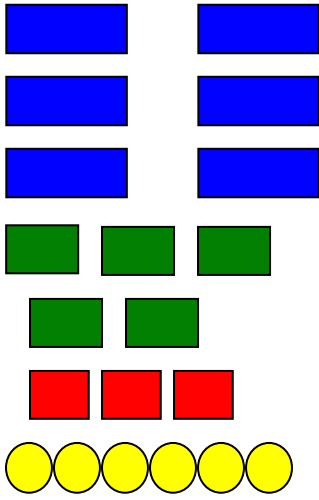

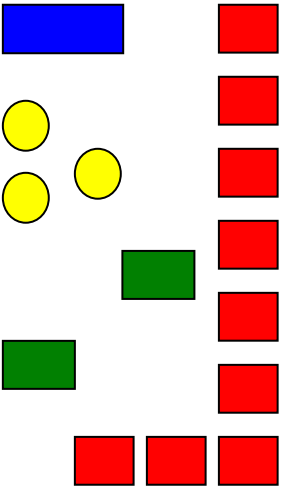

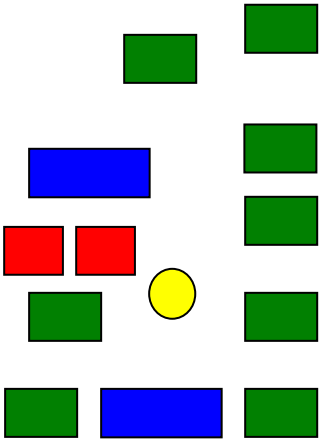







4. Susi hat auf ihrem Sparbuch 2 877 Euro. Sie zahlt 1 385 Euro ein. Wie viele Euro hat Susi auf dem Sparbuch?

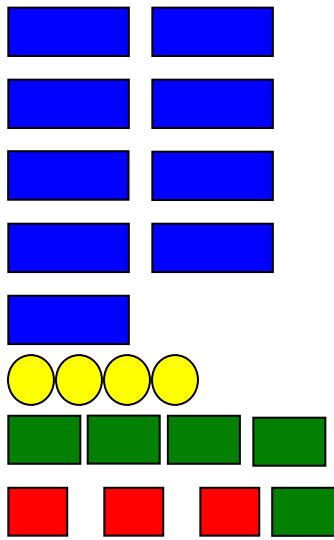
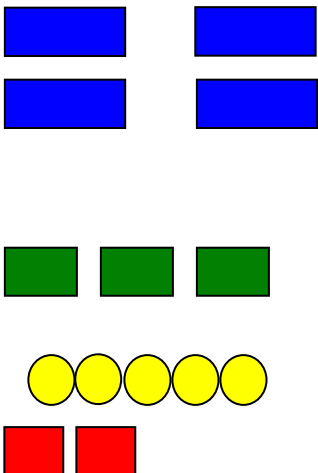
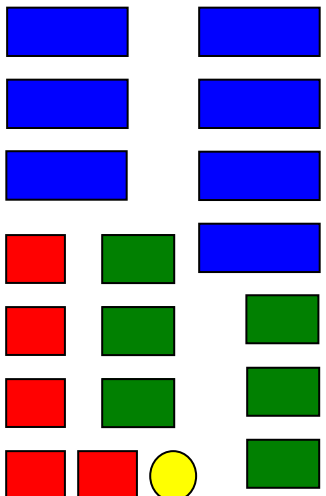
R:

A: _____

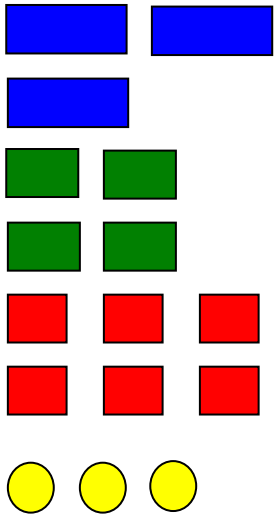
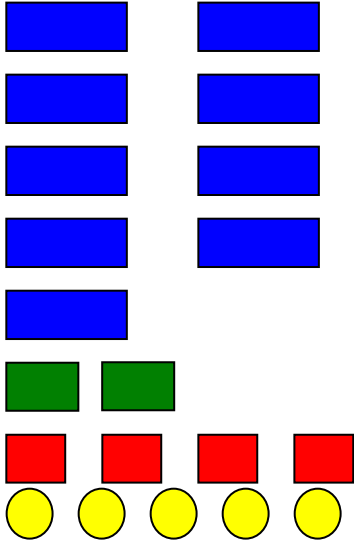
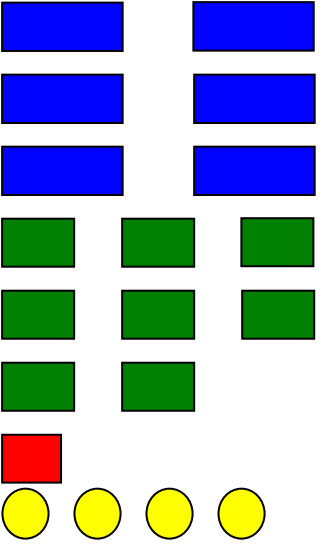
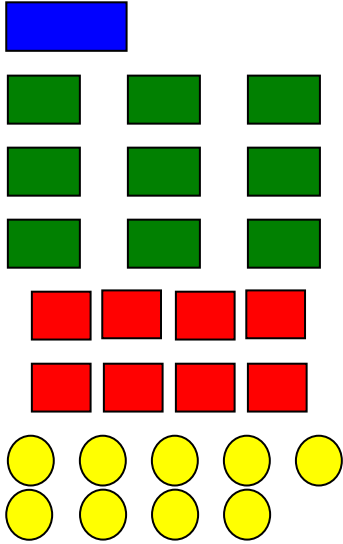
Setzleiste

<p>Zahlenraum 10 000</p>		
	<p>2T 3H 7Z 9E</p>	<p>5T 3H 8Z 4E</p>
	<p>2379</p>	<p>5384</p>

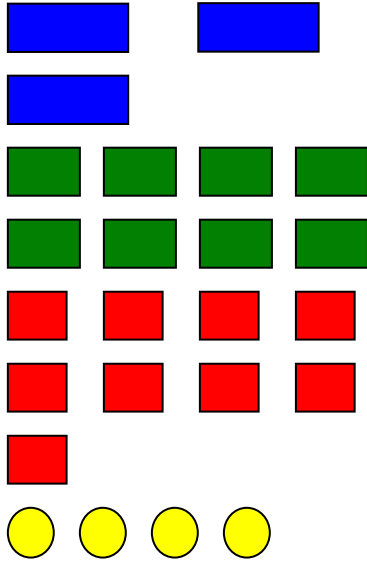
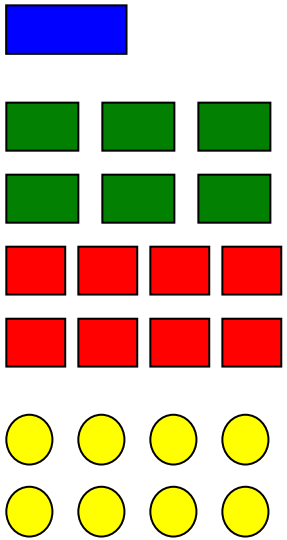
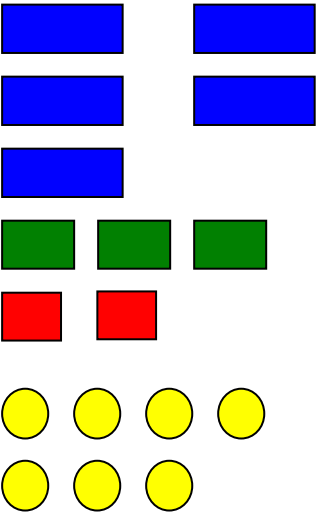

 	 	 
<p>6T 5H 3Z 6E</p> 	<p>1T 2H 9Z 3E</p> 	<p>2T 8H 2Z 1E</p> 
<p>6536</p> 	<p>1293</p> 	<p>2821</p> 

 <p style="text-align: right;">+</p>	 <p style="text-align: right;">♥</p>	 <p style="text-align: right;">◇</p>
<p>9T 5H 3Z 4E</p> <p style="text-align: right;">+</p>	<p>4T 3H 2Z 5E</p> <p style="text-align: right;">♥</p>	<p>7T 6H 5Z 1E</p> <p style="text-align: right;">◇</p>
<p>9534</p> <p style="text-align: right;">+</p>	<p>4325</p> <p style="text-align: right;">♥</p>	<p>7651</p> <p style="text-align: right;">◇</p>

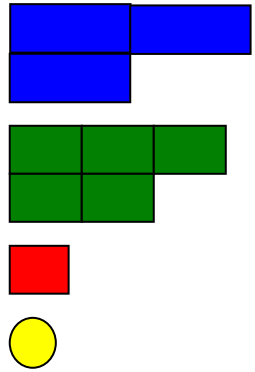
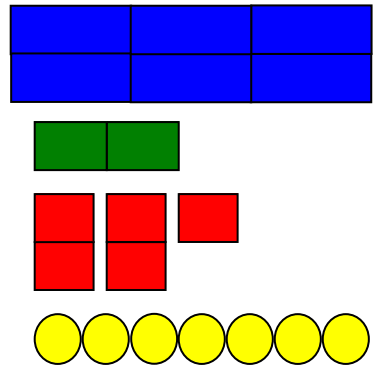
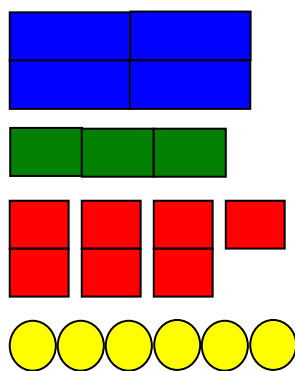
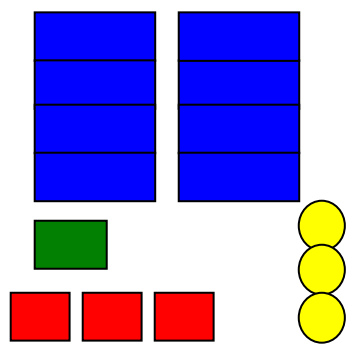
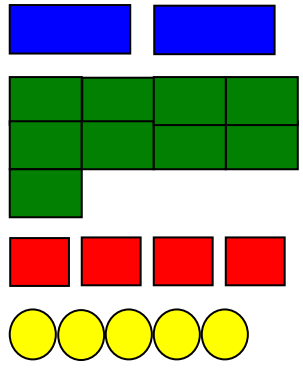
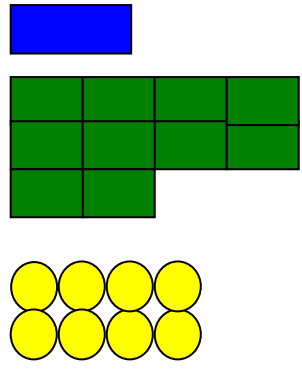
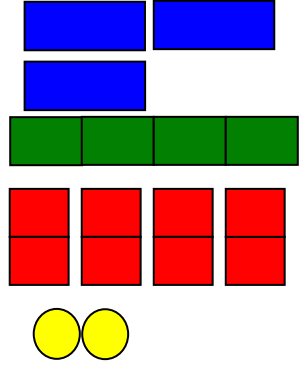
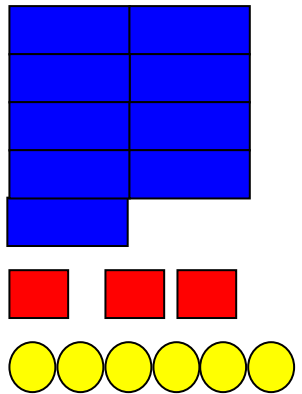
<p>6T 3H 8Z 3E</p>	<p>8T 5H 3Z 2E</p>	<p>3T 7H 4Z 4E</p>
<p>6383</p>	<p>8532</p>	<p>3744</p>

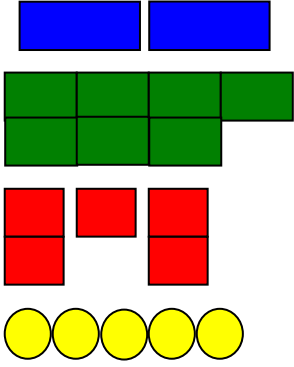
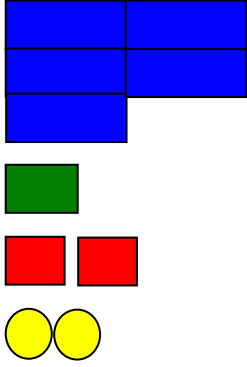
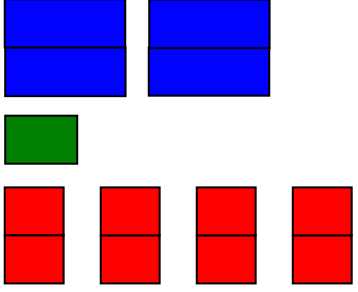
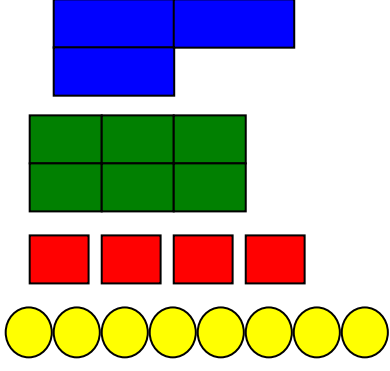
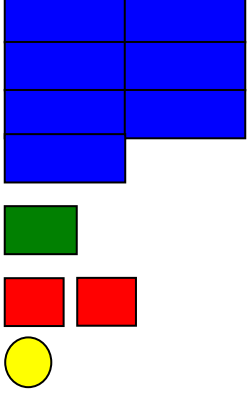
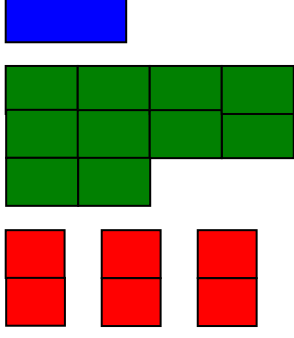
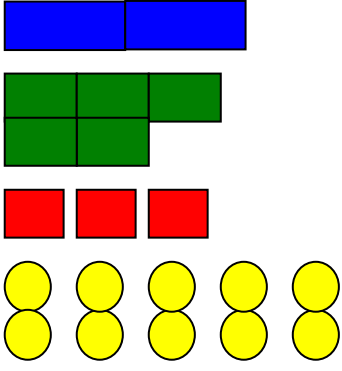
<p>Schwarzer Peter</p> <p>Zahlenraum 10 000</p>		<p>3463</p>
	<p>9245</p>	
<p>6814</p>		<p>1989</p>

	<p>4692</p>	
<p>2528</p>		<p>5131</p>
	<p>6356</p>	

<p>7250</p>		<p>3894</p>
	<p>1688</p>	
<p>5327</p>	<p>Schwarzer Peter</p> 	

Domino

<p><i>Start</i></p> 	<p>3511</p> 
<p>6257</p> 	<p>4376</p> 
<p>8133</p> 	<p>2945</p> 
<p>2008</p> 	<p>3482</p> 

<p>9036</p> 	<p>2755</p> 
<p>5122</p> 	<p>4180</p> 
<p>3648</p> 	<p>7121</p> 
<p>2060</p> 	<p>2540</p> <p><i>Ziel</i></p>

Domino

Start	1T 2H 9Z 6E	1296	8T 5H 1Z 6E
8516	5T 3H 8Z 1E	5381	2T 2H 0Z 3E
2203	9T 8H 1Z 6E	9816	6T 5H 9Z 4E
6594	1T 1H 7Z 0E	1170	7T 5H 4Z 2E
7542	1T 5H 5Z 5E	1555	6T 0H 9Z 1E
6091	4T 7H 0Z 0E	4700	Ziel

Kluppenkarte


2T 7H 5Z 2E	2725
	7255
	2752
4T 6H 9Z 3E	4693
	9364
	4639
9T 6H 7Z 2E	9627
	9672
	9762
5T 5H 8Z 6E	5486
	5586
	5568
1T 4H 8Z 2E	1428
	1482
	4182
5T 6H 8Z 3E	5386
	5863
	5683
1T 4H 9Z 0E	1490
	1094
	1409
2T 6H 7Z 3E	6273
	2637
	2673
1T 5H 9Z 9E	1599
	1955
	1959

8T 6H 7Z 0E	8 670
	8 760
	8 067
3T 5H 0Z 5E	3 055
	5 505
	3 505
8T 0H 6Z 7E	8 670
	8 067
	8 076
3T 7Z 0H 0E	3 007
	7 300
	3 700
2T 5H 6Z 1E	2 561
	2 516
	2 615
1T 9H 2Z 0E	1 290
	1 902
	1 920
8T 0H 7Z 0E	8 070
	8 700
	7 800
9T 5H 5Z 2E	9 255
	9 552
	9 525
3T 6H 7Z 8E	3 687
	3 786
	3 678

Stöpselkarte: Richtig oder falsch

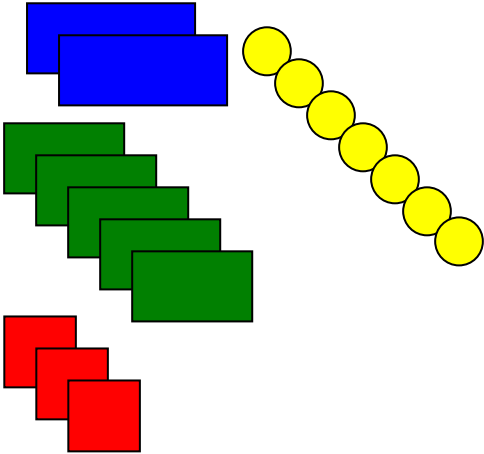
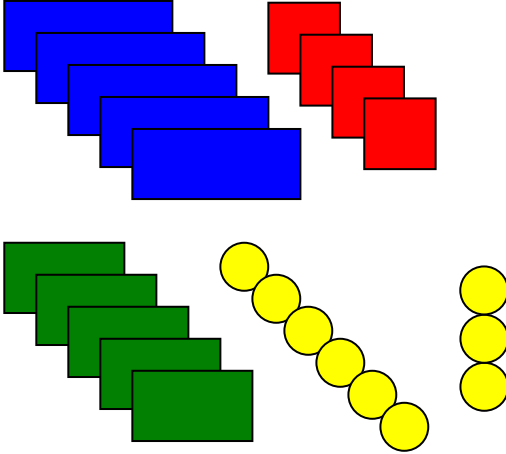
	richtig	falsch
$7T \ 4H \ 2Z \ 3E = 7 \ 423$		
$8T \ 5H \ 6Z \ 8E = 8 \ 586$		
$1T \ 6H \ 7Z \ 3E = 1 \ 673$		
$9T \ 2H \ 1Z \ 0E = 9 \ 100$		
$5T \ 9H \ 4Z \ 5E = 5 \ 955$		
$2T \ 7H \ 9Z \ 2E = 2 \ 792$		
$8T \ 6H \ 7Z \ 2E = 8 \ 672$		
$9T \ 1H \ 5Z \ 7E = 9 \ 157$		
$4T \ 5H \ 3Z \ 4E = 4 \ 543$		
$3T \ 8H \ 6Z \ 7E = 3 \ 876$		
$4T \ 7H \ 1Z \ 2E = 4 \ 712$		
$1T \ 5H \ 5Z \ 7E = 1 \ 557$		
$6T \ 4H \ 0Z \ 3E = 6 \ 403$		
$7T \ 0H \ 4Z \ 3E = 7 \ 430$		

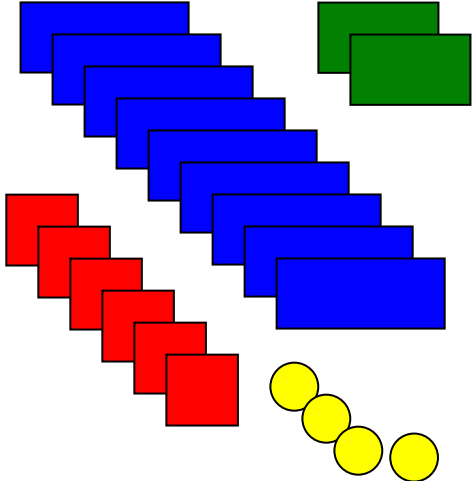
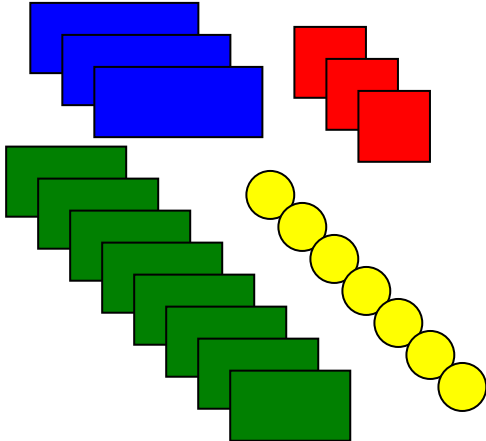
Lotto zum Selbstbeschriften
Bildplatte zum Zerschneiden



Lotto zum Selbstbeschriften Grundplatte

Magnetkarten (immer 3 gehören zusammen)

	2T 5H 3Z 7E	2 537
	5T 5H 4Z 9E	5 549

	<p>9T 2H 6Z 4E</p>	<p>9 264</p>
	<p>3T 8H 3Z 7E</p>	<p>3 837</p>

	<p>9T 7H 6Z 4E</p>	<p>9 764</p>
	<p>4T 7H 2Z 6E</p>	<p>4 726</p>

	<p>8T 1H 5Z 3E</p>	<p>8 153</p>
	<p>2T 8H 1Z 7E</p>	<p>2 817</p>