

Name: _____

Zahlenraum 1 000 (Hunderter)



Setze die Reihe fort:

100	200			

Nachbarn!

	300	
	800	
	500	
	200	
	900	

	400	
	600	
	700	
	100	
	500	

Setze das richtige Zeichen: < >

200 ○ 600

900 ○ 700

500 ○ 600

700 ○ 1 000

100 ○ 400

900 ○ 1 000

400 ○ 200

600 ○ 700

Kannst du das schon?

$200 + 300 =$

$800 - 600 =$

$800 + 200 =$

$100 + 800 =$

$900 - 500 =$

$500 + 300 =$

$600 + 200 =$

$200 - 200 =$

$700 - 200 =$

$400 + 400 =$

$600 - 300 =$

$1000 - 700 =$

Name: _____

Zahlenraum 1 000 (Hunderter, Zehner)



Setze die Reihe fort:

760	770			

Nachbarn!

	250	
	190	
	810	
	550	
	390	

	600	
	420	
	790	
	930	
	860	

Setze das richtige Zeichen: < >

320	<input type="radio"/>	420	890	<input type="radio"/>	980
910	<input type="radio"/>	900	150	<input type="radio"/>	220
540	<input type="radio"/>	450	890	<input type="radio"/>	790
650	<input type="radio"/>	590	580	<input type="radio"/>	850

Kannst du das schon?

120 + 30=	760 - 30=
550 + 40=	390 - 80=
910 + 60=	250 - 50=
640 + 40=	470 - 40=
340 + 60=	950 - 50=
730 + 10=	140 - 20=

Name: _____



Zahlenraum 1 000 (Hunderter, Zehner, Einer)

Setze die Reihe fort:

455	456			

Nachbarn!

	238	
	679	
	340	
	561	
	488	

	432	
	339	
	781	
	817	
	293	

Setze das richtige Zeichen: < >

569 ○ 568
193 ○ 182
781 ○ 782
395 ○ 394

395 ○ 400
921 ○ 911
8280 ○ 829
254 ○ 253

Kannst du das schon?

122 + 5 =
456 + 4 =
231 + 5 =
724 + 4 =
811 + 9 =
376 + 1 =

673 - 3 =
297 - 5 =
426 - 5 =
198 - 3 =
345 - 5 =
527 - 4 =

Name: _____

Zahlenraum 1 000





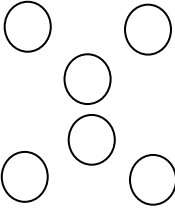


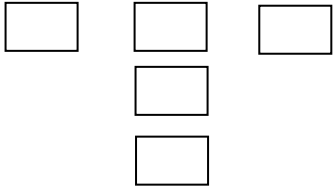

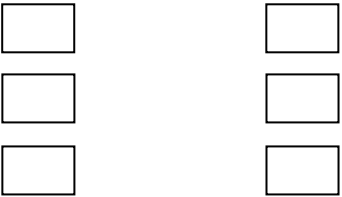
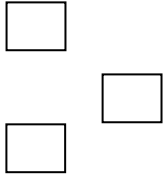
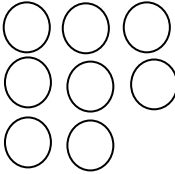

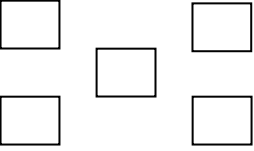





Schreibe die richtige Zahl dazu:

Male an: Hunderter = grün
 Zehner = rot
 Einer = blau

Hunderter	Zehner	Einer	Zahl
<div style="display: flex; flex-wrap: wrap; gap: 10px;"> <div style="border: 1px solid black; width: 30px; height: 30px; margin: 2px;"></div> <div style="border: 1px solid black; width: 30px; height: 30px; margin: 2px;"></div> <div style="border: 1px solid black; width: 30px; height: 30px; margin: 2px;"></div> <div style="border: 1px solid black; width: 30px; height: 30px; margin: 2px;"></div> <div style="border: 1px solid black; width: 30px; height: 30px; margin: 2px;"></div> </div>	<div style="display: flex; flex-wrap: wrap; gap: 10px;"> <div style="border: 1px solid black; width: 30px; height: 30px; margin: 2px;"></div> <div style="border: 1px solid black; width: 30px; height: 30px; margin: 2px;"></div> <div style="border: 1px solid black; width: 30px; height: 30px; margin: 2px;"></div> <div style="border: 1px solid black; width: 30px; height: 30px; margin: 2px;"></div> </div>	<div style="display: flex; flex-wrap: wrap; gap: 10px;"> <div style="border: 1px solid black; width: 20px; height: 20px; margin: 2px;"></div> <div style="border: 1px solid black; width: 20px; height: 20px; margin: 2px;"></div> <div style="border: 1px solid black; width: 20px; height: 20px; margin: 2px;"></div> <div style="border: 1px solid black; width: 20px; height: 20px; margin: 2px;"></div> <div style="border: 1px solid black; width: 20px; height: 20px; margin: 2px;"></div> <div style="border: 1px solid black; width: 20px; height: 20px; margin: 2px;"></div> </div>	
<div style="display: flex; flex-wrap: wrap; gap: 10px;"> <div style="border: 1px solid black; width: 30px; height: 30px; margin: 2px;"></div> <div style="border: 1px solid black; width: 30px; height: 30px; margin: 2px;"></div> <div style="border: 1px solid black; width: 30px; height: 30px; margin: 2px;"></div> </div>	<div style="display: flex; flex-wrap: wrap; gap: 10px;"> <div style="border: 1px solid black; width: 30px; height: 30px; margin: 2px;"></div> <div style="border: 1px solid black; width: 30px; height: 30px; margin: 2px;"></div> <div style="border: 1px solid black; width: 30px; height: 30px; margin: 2px;"></div> <div style="border: 1px solid black; width: 30px; height: 30px; margin: 2px;"></div> </div>	<div style="display: flex; flex-wrap: wrap; gap: 10px;"> <div style="border: 1px solid black; width: 20px; height: 20px; margin: 2px;"></div> <div style="border: 1px solid black; width: 20px; height: 20px; margin: 2px;"></div> <div style="border: 1px solid black; width: 20px; height: 20px; margin: 2px;"></div> <div style="border: 1px solid black; width: 20px; height: 20px; margin: 2px;"></div> <div style="border: 1px solid black; width: 20px; height: 20px; margin: 2px;"></div> </div>	
<div style="display: flex; flex-wrap: wrap; gap: 10px;"> <div style="border: 1px solid black; width: 30px; height: 30px; margin: 2px;"></div> <div style="border: 1px solid black; width: 30px; height: 30px; margin: 2px;"></div> <div style="border: 1px solid black; width: 30px; height: 30px; margin: 2px;"></div> <div style="border: 1px solid black; width: 30px; height: 30px; margin: 2px;"></div> <div style="border: 1px solid black; width: 30px; height: 30px; margin: 2px;"></div> <div style="border: 1px solid black; width: 30px; height: 30px; margin: 2px;"></div> </div>	<div style="display: flex; flex-wrap: wrap; gap: 10px;"> <div style="border: 1px solid black; width: 30px; height: 30px; margin: 2px;"></div> <div style="border: 1px solid black; width: 30px; height: 30px; margin: 2px;"></div> <div style="border: 1px solid black; width: 30px; height: 30px; margin: 2px;"></div> <div style="border: 1px solid black; width: 30px; height: 30px; margin: 2px;"></div> <div style="border: 1px solid black; width: 30px; height: 30px; margin: 2px;"></div> <div style="border: 1px solid black; width: 30px; height: 30px; margin: 2px;"></div> </div>	<div style="display: flex; flex-wrap: wrap; gap: 10px;"> <div style="border: 1px solid black; width: 20px; height: 20px; margin: 2px;"></div> <div style="border: 1px solid black; width: 20px; height: 20px; margin: 2px;"></div> <div style="border: 1px solid black; width: 20px; height: 20px; margin: 2px;"></div> </div>	
<div style="border: 1px solid black; width: 30px; height: 30px; margin: 2px;"></div>	<div style="display: flex; flex-wrap: wrap; gap: 10px;"> <div style="border: 1px solid black; width: 30px; height: 30px; margin: 2px;"></div> <div style="border: 1px solid black; width: 30px; height: 30px; margin: 2px;"></div> </div>	<div style="display: flex; flex-wrap: wrap; gap: 10px;"> <div style="border: 1px solid black; width: 20px; height: 20px; margin: 2px;"></div> <div style="border: 1px solid black; width: 20px; height: 20px; margin: 2px;"></div> <div style="border: 1px solid black; width: 20px; height: 20px; margin: 2px;"></div> <div style="border: 1px solid black; width: 20px; height: 20px; margin: 2px;"></div> </div>	
<div style="display: flex; flex-wrap: wrap; gap: 10px;"> <div style="border: 1px solid black; width: 30px; height: 30px; margin: 2px;"></div> <div style="border: 1px solid black; width: 30px; height: 30px; margin: 2px;"></div> <div style="border: 1px solid black; width: 30px; height: 30px; margin: 2px;"></div> <div style="border: 1px solid black; width: 30px; height: 30px; margin: 2px;"></div> <div style="border: 1px solid black; width: 30px; height: 30px; margin: 2px;"></div> <div style="border: 1px solid black; width: 30px; height: 30px; margin: 2px;"></div> <div style="border: 1px solid black; width: 30px; height: 30px; margin: 2px;"></div> <div style="border: 1px solid black; width: 30px; height: 30px; margin: 2px;"></div> </div>	<div style="display: flex; flex-wrap: wrap; gap: 10px;"> <div style="border: 1px solid black; width: 30px; height: 30px; margin: 2px;"></div> <div style="border: 1px solid black; width: 30px; height: 30px; margin: 2px;"></div> <div style="border: 1px solid black; width: 30px; height: 30px; margin: 2px;"></div> <div style="border: 1px solid black; width: 30px; height: 30px; margin: 2px;"></div> <div style="border: 1px solid black; width: 30px; height: 30px; margin: 2px;"></div> <div style="border: 1px solid black; width: 30px; height: 30px; margin: 2px;"></div> </div>	<div style="border: 1px solid black; width: 20px; height: 20px; margin: 2px;"></div>	
<div style="display: flex; flex-wrap: wrap; gap: 10px;"> <div style="border: 1px solid black; width: 30px; height: 30px; margin: 2px;"></div> <div style="border: 1px solid black; width: 30px; height: 30px; margin: 2px;"></div> <div style="border: 1px solid black; width: 30px; height: 30px; margin: 2px;"></div> <div style="border: 1px solid black; width: 30px; height: 30px; margin: 2px;"></div> <div style="border: 1px solid black; width: 30px; height: 30px; margin: 2px;"></div> <div style="border: 1px solid black; width: 30px; height: 30px; margin: 2px;"></div> </div>	<div style="display: flex; flex-wrap: wrap; gap: 10px;"> <div style="border: 1px solid black; width: 30px; height: 30px; margin: 2px;"></div> <div style="border: 1px solid black; width: 30px; height: 30px; margin: 2px;"></div> <div style="border: 1px solid black; width: 30px; height: 30px; margin: 2px;"></div> <div style="border: 1px solid black; width: 30px; height: 30px; margin: 2px;"></div> <div style="border: 1px solid black; width: 30px; height: 30px; margin: 2px;"></div> </div>	<div style="display: flex; flex-wrap: wrap; gap: 10px;"> <div style="border: 1px solid black; width: 20px; height: 20px; margin: 2px;"></div> <div style="border: 1px solid black; width: 20px; height: 20px; margin: 2px;"></div> <div style="border: 1px solid black; width: 20px; height: 20px; margin: 2px;"></div> <div style="border: 1px solid black; width: 20px; height: 20px; margin: 2px;"></div> </div>	

Name: _____

Male an: Hunderter = grün
 Zehner = rot
 Einer = blau

Hunderter	Zehner	Einer	Zahl
			
			
			
			
			
			
			

Name: _____

Zahlenraum 1 000



Ergänzen:

$200 + \underline{\quad} = 1\,000$

$400 + \underline{\quad} = 1\,000$

$500 + \underline{\quad} = 1\,000$

$600 + \underline{\quad} = 1\,000$

$100 + \underline{\quad} = 1\,000$

$300 + \underline{\quad} = 1\,000$

$700 + \underline{\quad} = 1\,000$

$800 + \underline{\quad} = 1\,000$

Setze zusammen:

$7H\ 1Z\ 9E = \underline{\quad}$

$2T\ 9E\ 2Z = \underline{\quad}$

$4H\ 8Z\ 2E = \underline{\quad}$

$5T\ 3Z\ 7H = \underline{\quad}$

$8H\ 4Z\ 5E = \underline{\quad}$

$1H\ 1T\ 9E = \underline{\quad}$

$9H\ 1Z\ 2E = \underline{\quad}$

$7E\ 2Z\ 3H = \underline{\quad}$

$9H\ 3Z\ 7E = \underline{\quad}$

$4H\ 8E\ 8T = \underline{\quad}$

Zerlege die Zahlen:

$463 = \quad 4H\ 6Z\ 3E$

$892 = \underline{\quad}$

$584 = \underline{\quad}$

$004 = \underline{\quad}$

$702 = \underline{\quad}$

$213 = \underline{\quad}$

$923 = \underline{\quad}$

$520 = \underline{\quad}$

$656 = \underline{\quad}$

$345 = \underline{\quad}$

Schreibe alle Möglichkeiten auf:

H	Z	E

561

H	Z	E

930

H	Z	E

563

Name: _____

Zahl

Sachrechnen

1.) Rudi hat auf seinem Sparbuch 200 Euro. Manuel hat 600 Euro.
Wie viele Euro haben beide insgesamt?

R:

A: _____

2.) Lilli hat 800 Euro. Sie kauft sich einen Fernseher um 100 Euro.
Wie viele Euro hat Lilli noch?

R:

A: _____

3.) Auf einem Lastwagen sind 500 kg Kohlen. 200 kg Kohlen werden
abgeladen. Wie viele kg Kohlen sind noch auf dem Lastwagen?

R:

A: _____

4.) Auf dem ersten Lastwagen sind 400 kg Äpfel, auf dem zweiten
Lastwagen sind 300 kg Birnen und auf dem dritten Lastwagen sind
100 kg Zwetschken. Wie viele kg Obst sind auf allen Lastwägen?

R:

A: _____

Name: _____

Zahlenraum 1 000



Sachrechnen

1.) Eine Straße ist 450 m lang. Bei Bauarbeiten wird sie um 120 m verlängert. Wie lang ist die Straße?

R:

A: _____

2.) Auf einem Ballen Stoff sind 128 m. 19 m Stoff werden verkauft. Wie viele m Stoff sind noch auf dem Ballen?

R:

A: _____

3.) Auf einem Lastwagen sind 453 kg Äpfel. 46 kg Äpfel werden abgeladen. Wie viele kg Äpfel sind noch auf dem Lastwagen?

R:

A: _____

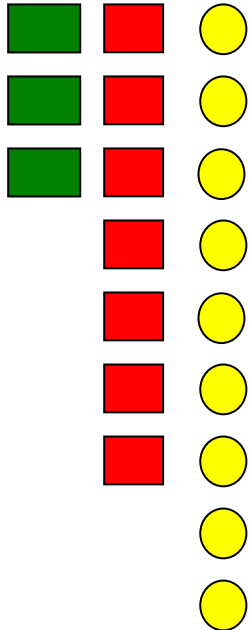
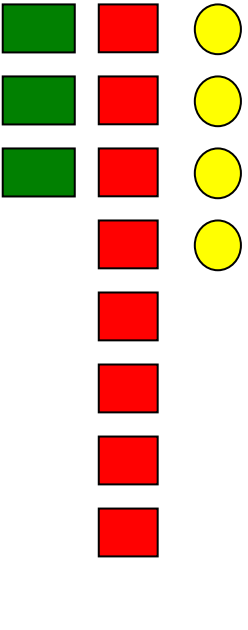
4.) Susi hat auf ihrem Spargbuch 212 Euro. Sie zahlt 77 Euro ein. Wie viele Euro hat Susi auf dem Spargbuch?

R:

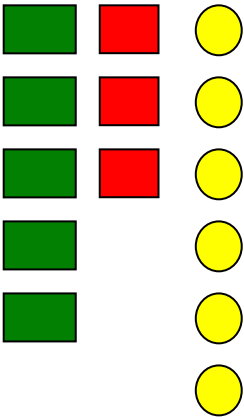











A: _____

Name: _____

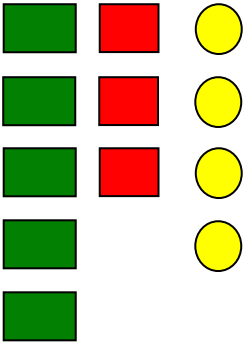

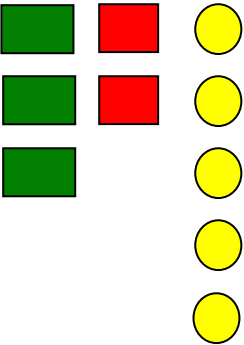









Setzleiste

<p>Zahlenraum 1 000</p>	 <p><input type="checkbox"/></p>	 <p><input type="checkbox"/></p>
	<p>3H 7Z 9E</p> <p><input type="checkbox"/></p>	<p>3H 8Z 4E</p> <p><input type="checkbox"/></p>
	<p>379</p> <p><input type="checkbox"/></p>	<p>384</p> <p><input type="checkbox"/></p>

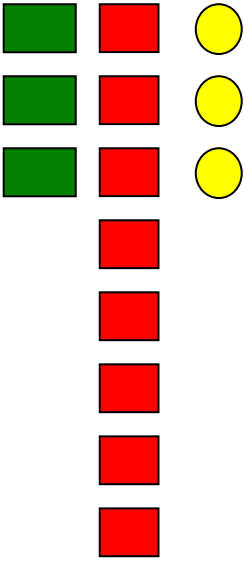

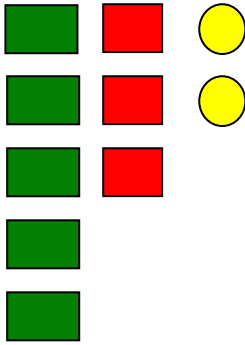

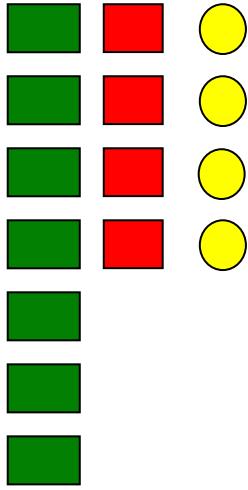







Name: _____

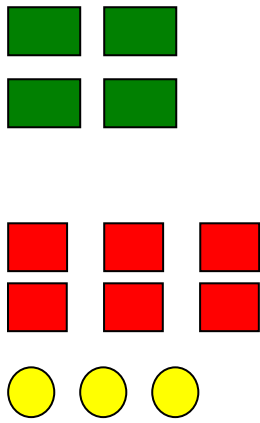

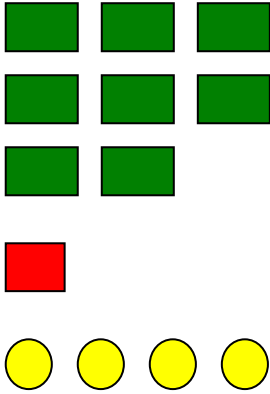
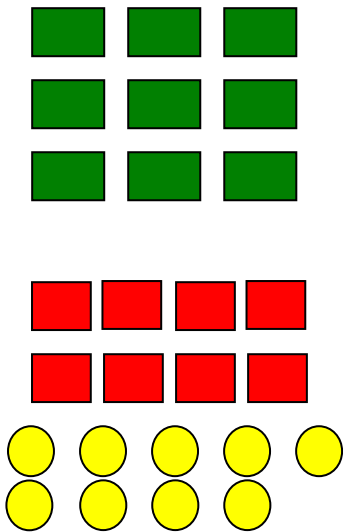
 	 	 
5H 3Z 6E 	2H 9Z 3E 	8H 2Z 1E 
536 	293 	821 

Name: _____

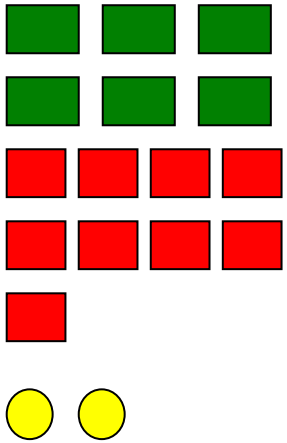
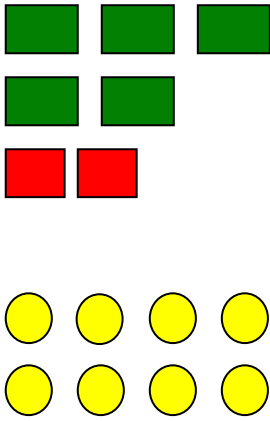
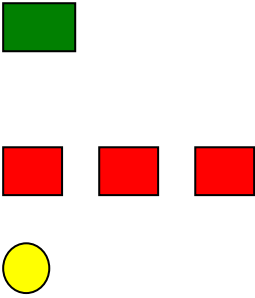
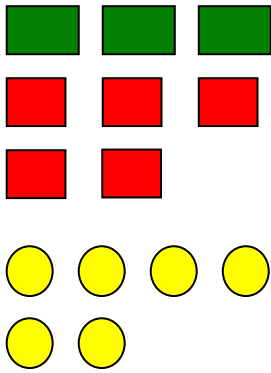
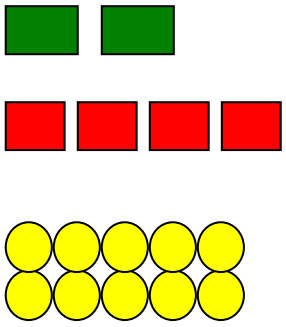
 	 	 
5H 3Z 4E 	3H 2Z 5E 	6H 5Z 1E 
534 	325 	651 

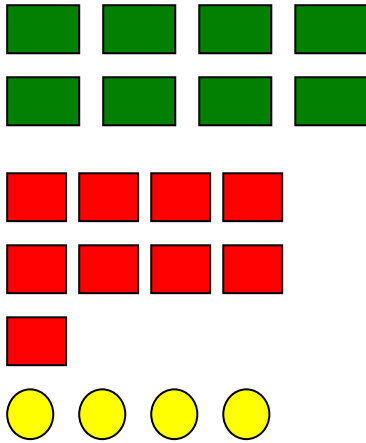
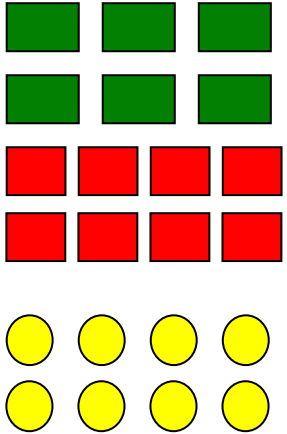
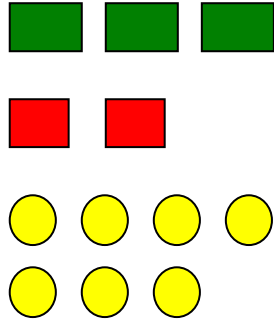

Name: _____

 	 	 
3H 8Z 3E 	5H 3Z 2E 	7H 4Z 4E 
383 	532 	744 

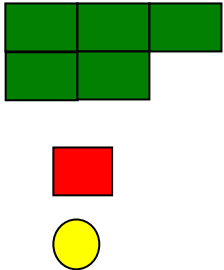
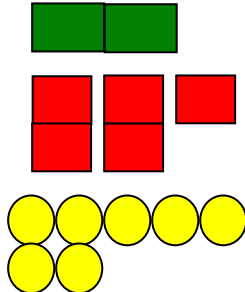
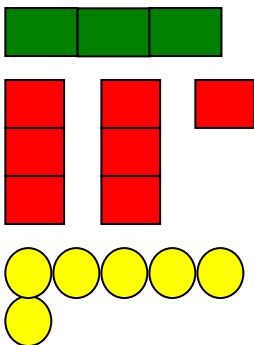
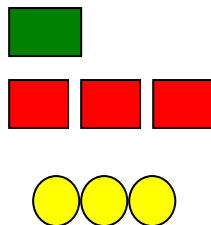
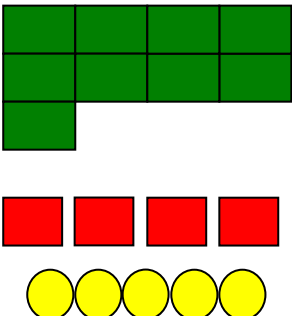
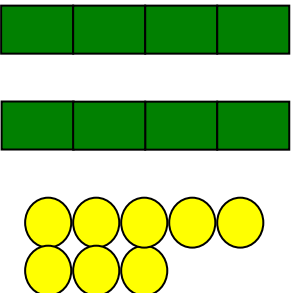
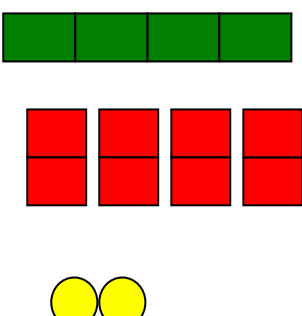
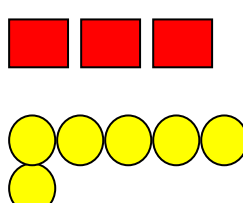
<p>Schwarzer Peter</p> <p>Zahlenraum 1 000</p>		<p>463</p>
	<p>245</p>	
<p>814</p>		<p>989</p>

Name: _____

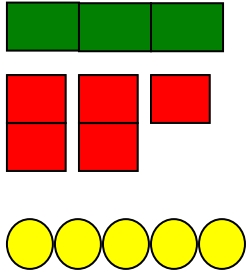
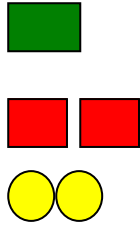
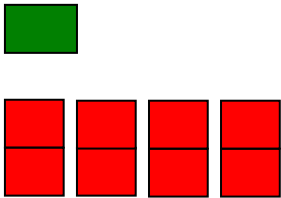
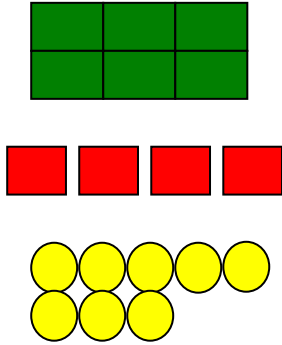
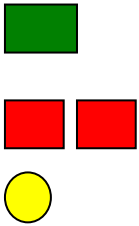
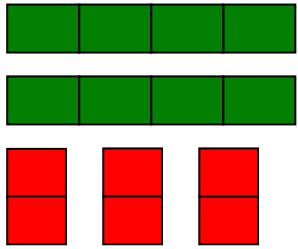
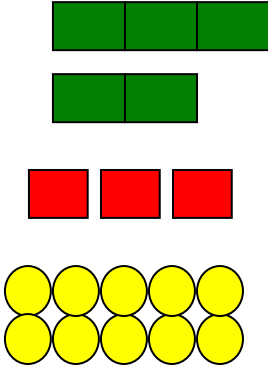
	692	
528		131
	356	

250		894
	688	
527	Schwarzer Peter 	

Domino

<p><i>Start</i></p>		<p>511</p>	
<p>257</p>		<p>376</p>	
<p>133</p>		<p>945</p>	
<p>808</p>		<p>482</p>	

Name: _____

36		755	
122		180	
648		121	
860		540	<i>Ziel</i>

Name: _____

Domino

Start	2H9Z6E	296	5H1Z6E
516	3H8Z1E	381	2H0Z3E
203	8H1Z6E	816	5H9Z4E
594	1H7Z0E	170	5H4Z2E
542	5H5Z5E	555	0H9Z1E
91	7H0Z0E	700	Ziel

Name: _____

Kluppenkarte

7H5Z2E	725
	255
	752
6H9Z3R	693
	364
	639
6H7Z2E	627
	672
	762
5H8Z6E	486
	586
	568
4H8Z2E	428
	482
	182
6H8Z3E	386
	863
	683
4H9Z0E	490
	094
	409
6H7Z3E	273
	637
	673
5H9Z9E	599
	955
	959

6H7Z0E	670
	760
	067
5H0Z5E	055
	505
	505
0H6Z7E	670
	067
	076
7Z0H0E	007
	300
	700
5H6Z1E	561
	516
	615
9H2Z0E	290
	902
	920
0H7Z0E	070
	700
	800
5H5Z2E	255
	552
	525
6H7Z8E	687
	786
	678

Name: _____

Stöpselkarte: Richtig oder falsch?

	richtig	falsch
$4H2Z3E = 423$		
$5H6Z8E = 586$		
$6H7Z3E = 673$		
$2H1Z0E = 110$		
$9H4Z5E = 955$		
$7H9Z2E = 792$		
$6H7Z2E = 672$		
$1H5Z7E = 157$		
$5H3Z4E = 543$		
$8H6Z7E = 876$		
$7H1Z2E = 712$		
$5H5Z7E = 557$		
$4H0Z3E = 403$		
$0H4Z3E = 430$		

Name: _____

Lotto

Bildplatte zum Zerschneiden



Name: _____

Lotto

Grundplatte

3H2Z7E	5H8Z5E	1H9Z4E	2H6Z8E
9H9Z7E	4H4Z8E	8H0Z4E	1H7Z0E
3H6Z1E	2H2Z2E	7H0Z6E	2H8Z6E
5H7Z6E	1H0Z0E	8H7Z1E	8H2Z6E
3H8Z1E	5H2Z4E	7H8Z0E	3H1Z7E

Name: _____

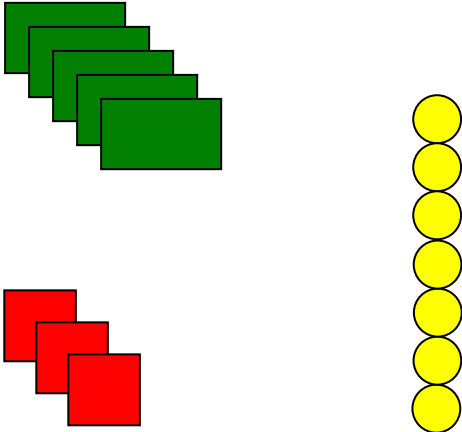
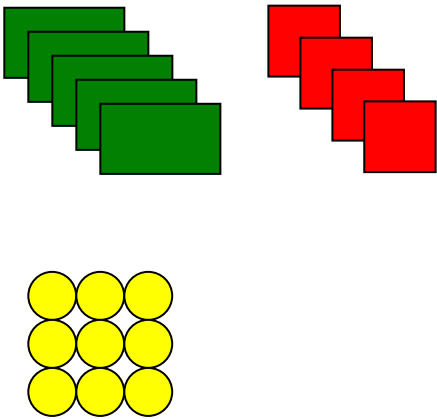
Lotto

Grundplatte

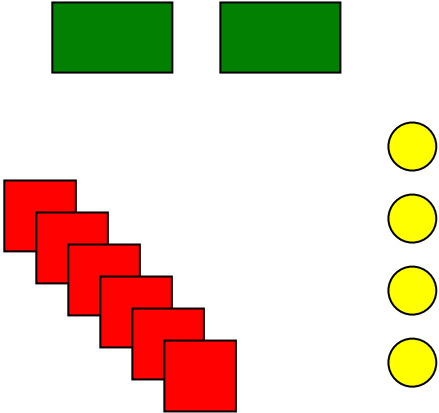
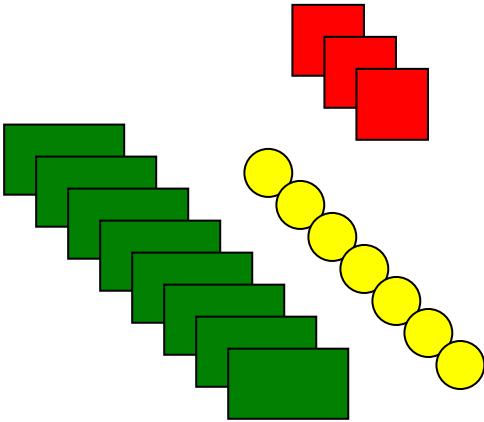
268	194	585	327
170	804	448	997
286	706	222	361
826	871	100	576
317	780	524	381

Name: _____

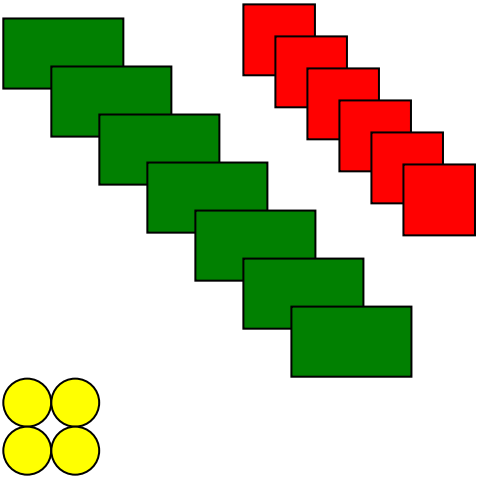
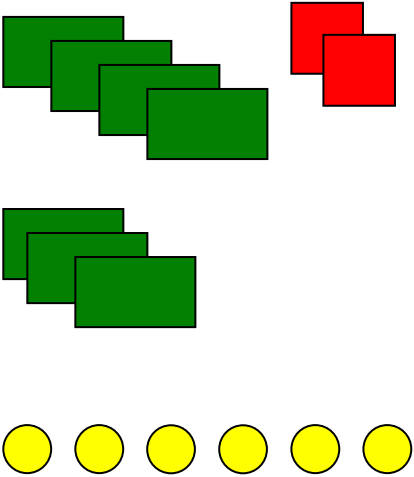
Magnetkarten (immer 3 gehören zusammen)

 <p>5H3Z7E</p>	<p>537</p>
 <p>5H4Z9E</p>	<p>549</p>

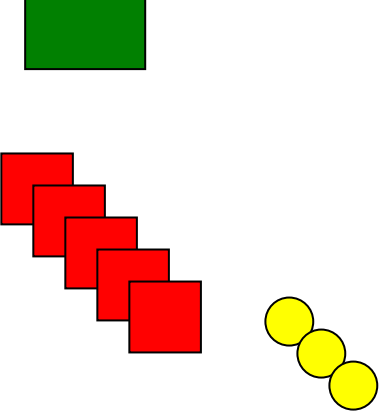
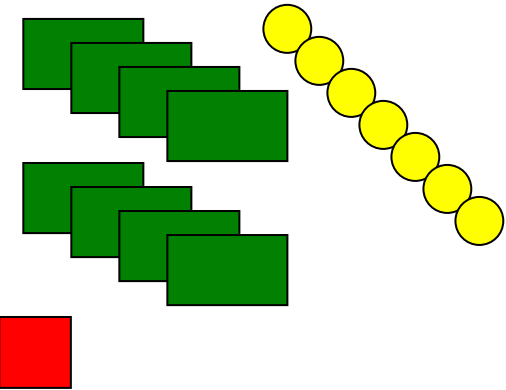
Name: _____

	2H6Z4E	264
	8H3Z7E	837

Name: _____

 <p>7 tens rods, 6 ones units, 4 hundreds flats</p>	$7H6Z4E$	764
 <p>7 tens rods, 2 ones units, 6 hundreds flats</p>	$7H2Z6E$	726

Name: _____

	1H5Z3E	153
	8H1Z7E	817