




























 10	 11	 12
--	--	--




1	 $18 - 6 = \square$
2	 $20 - 9 = \square$
3	 $17 - 7 = \square$
4	 $11 - 1 = \square$
5	 $15 - 3 = \square$
6	 $17 - 6 = \square$




7	$14 - 2 = \square$ 
8	$16 - 4 = \square$ 
9	$19 - 8 = \square$ 
10	$18 - 8 = \square$ 
11	$12 - 2 = \square$ 
12	$14 - 3 = \square$ 







 12	 13	 14
--	--	--







1	 $19 - 6 = \square$
2	 $16 - 4 = \square$
3	 $18 - 4 = \square$
4	 $20 - 8 = \square$
5	 $15 - 2 = \square$
6	 $12 - 0 = \square$







7	$20 - 6 = \square$ 
8	$18 - 4 = \square$ 
9	$19 - 7 = \square$ 
10	$20 - 7 = \square$ 
11	$16 - 2 = \square$ 
12	$17 - 5 = \square$ 






 14	 15	 16
--	--	--

 16	 17	 18
--	--	--

1	 20 - 4 = <input type="text"/>
2	 15 - 1 = <input type="text"/>
3	 18 - 2 = <input type="text"/>
4	 14 - 0 = <input type="text"/>
5	 16 - 1 = <input type="text"/>
6	 19 - 4 = <input type="text"/>

7	19 - 5 = <input type="text"/> 
8	16 - 2 = <input type="text"/> 
9	20 - 5 = <input type="text"/> 
10	18 - 3 = <input type="text"/> 
11	20 - 6 = <input type="text"/> 
12	17 - 3 = <input type="text"/> 

1	 20 - 3 = <input type="text"/>
2	 18 - 2 = <input type="text"/>
3	 19 - 3 = <input type="text"/>
4	 17 - 0 = <input type="text"/>
5	 20 - 2 = <input type="text"/>
6	 17 - 1 = <input type="text"/>

7	20 - 4 = <input type="text"/> 
8	18 - 1 = <input type="text"/> 
9	16 - 0 = <input type="text"/> 
10	17 - 1 = <input type="text"/> 
11	19 - 2 = <input type="text"/> 
12	19 - 1 = <input type="text"/> 