

$$9 - \square = 0$$

$$8 - \square = 1$$

$$10 - \square = 2$$


$$7 - \square = 3$$

$3 + \square = 8$


$2 + \square = 8$

$6 + \square = 9$


$8 + \square = 10$



$$+ 0 = 10$$



$$+ 8 = 9$$



$$+ 2 = 2$$

| | | |
|----------|----------|-----------|
| 9 | 7 | 8 |
| 4 | 5 | 6 |
| 3 | 2 | 10 |
| 1 | 0 | |

Karten: Magnetmaterial Ergänzen Zahlenraum 10