

ERGÄNZEN




Welche Münzen fehlen dir auf **2 €**?
Zeichne sie ein !



=

1 €





50 c



oder




1 €

20 c



oder

50 c

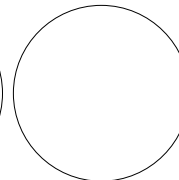
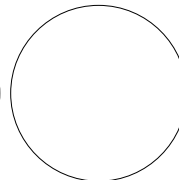




Welche Münzen fehlen dir auf **5 €**?
Zeichne sie ein !



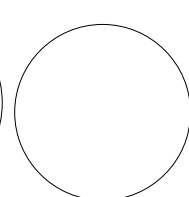

=

1 €



oder

2 €



Name :